



Introduction

If you went to a pet store and bought a hamster for a pet, you probably would expect it to remain rather small for its entire life. You would feed your hamster every day and make sure it had enough water, and once it reached a hamster size, it would stop growing and remain that size for the rest of its life. Just imagine if this were not the case, and your pet hamster kept growing for its entire life span! You might end up with a hamster the size of a dog! Of course, hamsters do not grow forever; they have a size limit. This is typical of endothermic, or warm-blooded animals. Some animals, however, continue to grow until the end of their life spans. Many ectothermic, or cold-blooded animals are like this. The ectothermic vertebrates are fish, amphibians, and reptiles, and many of these animals can continue to grow until they die.



© Alexander

Kovalenko | Dreamstime.com

Objectives

In this activity, you will:

- examine the growth rates of three different species of fish that are commonly caught by people who go fishing.
- enter and graph the data, and compare the growth rates of the three species of fish.

You'll Need

- TI-84 Plus CE calculator
- Data Table of fish growth rates (below)



Northern Pike Length in cm	Northern Pike Mass in kg	Walleye Length in cm	Walleye Mass in kg	Largemouth Bass Length in cm	Largemouth Bass Mass in kg
60	1.74	36	.46	20	.18
62	1.80	38	.54	22	.26
64	2.00	40	.67	24	.28
66	2.27	42	.70	26	.37
68	2.52	44	.84	28	.49
70	2.77	46	1.00	30	.63
72	2.85	48	1.13	32	.67
74	3.18	50	1.34	34	.84
76	3.48	52	1.39	36	1.00
78	3.82	54	1.56	38	1.27
80	4.15	56	1.77	40	1.52
82	4.26	58	2.03	42	1.81
84	4.64	60	2.29	44	1.89
86	5.06	62	2.36	46	2.23
88	5.47	64	2.61	48	2.57
90	5.60	66	2.95	50	2.99
92	6.07	68	3.24	52	3.11
94	6.59	70	3.62	54	3.59
96	7.08	72	3.73	56	4.10
98	7.58	74	4.11	58	4.65
100	7.74	76	4.53	60	5.23
		78	4.95	62	5.41
		80	5.40		

Entering the Data

1. Press $\boxed{y=}$. If there are any equations on this screen, press $\boxed{\nabla}$ to place the cursor next to **Y1=**, and then press $\boxed{\text{clear}}$, to clear the equation. Repeat this sequence to clear all equations.
2. Press $\boxed{\text{mode}}$ and make sure the defaults are set.
3. Press $\boxed{2\text{nd}} \boxed{\text{format}}$ and make sure the defaults are set.
4. Press $\boxed{\text{stat}} \boxed{\text{enter}}$.
5. Press $\boxed{\uparrow}$ to move to the heading **L1**. Press $\boxed{\text{clear}} \boxed{\text{enter}}$. Repeat this procedure for any list that has data.
6. Using the data table on the previous page, enter the data into **L1** (northern pike length) and **L2** (northern pike mass). In **L3** and **L4**, do the same for the walleye, and in **L5** and **L6** for the bass.
7. To do this, type in the first number in **L1** and then press either $\boxed{\text{enter}}$ or $\boxed{\nabla}$ to move down to the next spot in the list. Continue until you have entered all of the northern pike length data in **L1**. When you complete the data from **L1**, press $\boxed{\rightarrow}$ to move to **L2** and enter the northern pike mass data. Repeat this for the walleye and the bass in the remaining lists.



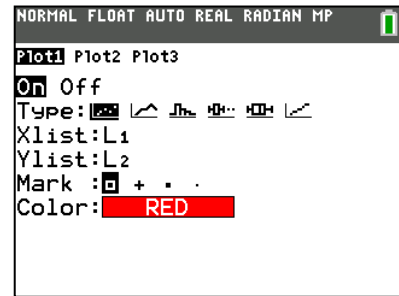
Something's Fishy

Student Activity

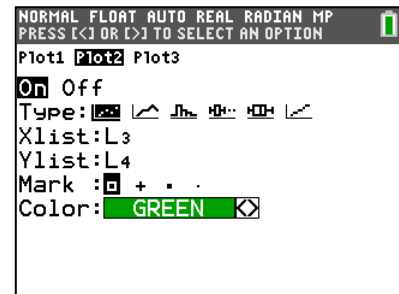
Name _____

Class _____

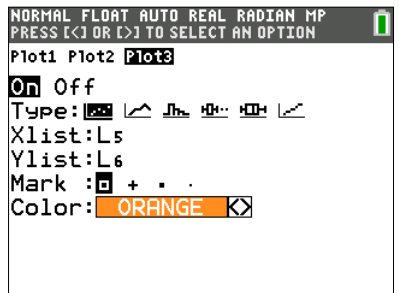
- Press **2nd** [stat plot]. Press **enter** to select **1:Plot1**. Set your TI-84 as shown at the right.



- Press **2nd** [stat plot]. Press **enter** to select **2:Plot2**. Set your TI-84 Plus CE as shown at the right.



- Repeat for **Plot3**. Set your TI-84 Plus CE as shown at the right.



- Press **window** and make appropriate settings for the size of your graph. Your window must reflect ALL of the data in your lists, because you will be graphing all of the data at one time. A suggestion when setting your window is to set the **Xmax** value slightly lower than the lowest value in your lists, and the **Ymax** value slightly higher than the highest value in your lists. Remember, you have three x-lists and three y-lists to consider, and you will use one window setting for all of them.
- Press **graph** to see your data displayed graphically.

Data Analysis

- When you construct your graphs, what is the independent variable?
- What is the dependent variable?



Something's Fishy

Student Activity

Name _____

Class _____

3. Which species of fish appears to gain the most mass per cm of length?

4. Suppose that you are out fishing, and you catch a 61-cm fish of each species. Draw what each fish would look like.
 - a. Northern Pike
Walleye
Bass

5. As a northern pike grows from 68.6 cm to 71.1 cm, how much mass would the fish likely gain?

6. As a northern pike grows from 92.9 cm to 96.5 cm, how much mass would the fish likely gain?

7. What do you notice about the rate of mass gain in each fish? Explain why the mass gain per cm changes as the fish gets longer and longer.

8. Fish of the same species and the same age but found in lakes of much different latitudes may be dramatically different in size. Describe some factors that may lead to these differences.

